



**Cambridge International Examinations**  
Cambridge International General Certificate of Secondary Education

CANDIDATE NAME

CENTRE NUMBER

CANDIDATE NUMBER



**PHYSICS**

**0625/53**

Paper 5 Practical Test

**October/November 2017**

**1 hour 15 minutes**

Candidates answer on the Question Paper.

Additional Materials: As listed in the Confidential Instructions

**READ THESE INSTRUCTIONS FIRST**

Write your Centre number, candidate number and name in the spaces at the top of the page.  
Write in dark blue or black pen.  
You may use an HB pencil for any diagrams or graphs.  
Do not use staples, paper clips, glue or correction fluid.  
**DO NOT WRITE IN ANY BARCODES.**

Answer **all** questions.  
You are advised to spend about 20 minutes on each of questions 1 to 3, and about 15 minutes on question 4.  
Electronic calculators may be used.  
You may lose marks if you do not show your working or if you do not use appropriate units.

At the end of the examination, fasten all your work securely together.  
The number of marks is given in brackets [ ] at the end of each question or part question.

For Examiner's Use	
<b>1</b>	
<b>2</b>	
<b>3</b>	
<b>4</b>	
<b>Total</b>	

The syllabus is approved for use in England, Wales and Northern Ireland as a Cambridge International Level 1/Level 2 Certificate.

This document consists of **11** printed pages and **1** blank page.

- 1 In this experiment, you will investigate how the use of a lid affects the rate of cooling of water in a beaker.

Carry out the following instructions, referring to Fig. 1.1.

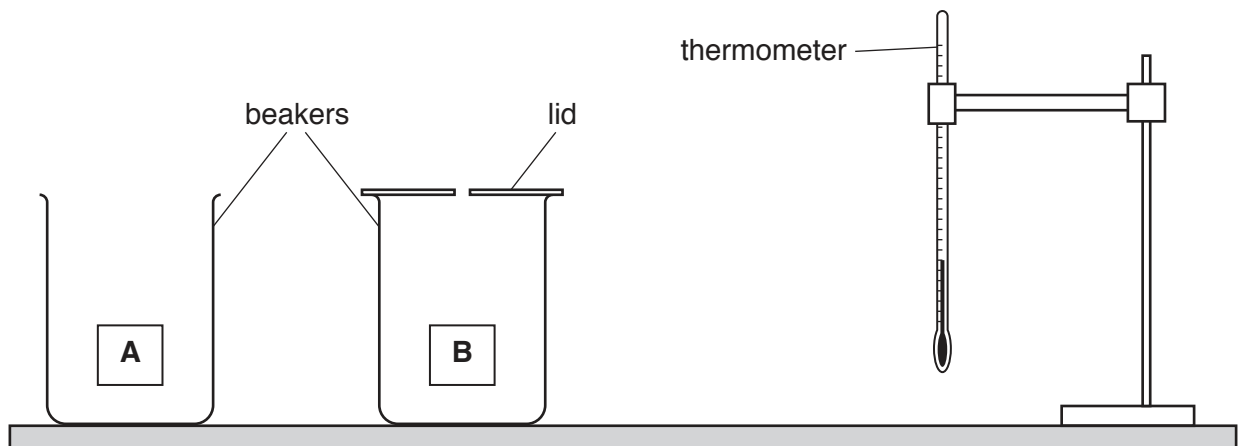


Fig. 1.1

- (a)
- Pour  $100\text{ cm}^3$  of hot water into beaker **A**.
  - Place the thermometer in the water in beaker **A**.
  - In Table 1.1, record the temperature  $\theta$  of the water at time  $t = 0\text{ s}$  and immediately start the stopclock.
  - Record, in the table, the temperature  $\theta$  of the water at times  $t = 30\text{ s}$ ,  $60\text{ s}$ ,  $90\text{ s}$ ,  $120\text{ s}$ ,  $150\text{ s}$  and  $180\text{ s}$ .
  - Remove the thermometer from the beaker. [1]
- (b) (i) Remove the lid from beaker **B**.  
Repeat the procedure in (a) for beaker **B**, using  $75\text{ cm}^3$  of hot water, and replace the lid immediately after pouring in the water. [1]
- (ii) Complete the headings and the time column in Table 1.1. [2]

Table 1.1

	beaker <b>A</b> without a lid	beaker <b>B</b> with a lid
$t/$	$\theta/$	$\theta/$
0		

(c) Describe **two** precautions that you took to ensure that the temperature readings were as accurate as possible in the experiment.

1 .....

.....

2 .....

.....

[2]

(d) (i) Write a conclusion, stating how the use of the lid affects the rate of cooling of the water. Justify your answer by reference to your results.

.....

.....

.....

.....

[2]

(ii) Suggest **one** change to the apparatus or procedure to make the comparison a fairer test. Explain why the change makes the test fairer.

change .....

.....

explanation .....

.....

.....

[2]

(iii) The temperature of the water in each beaker decreases.

Describe **one** other similarity in the pattern of cooling in beakers **A** and **B**.

.....

.....

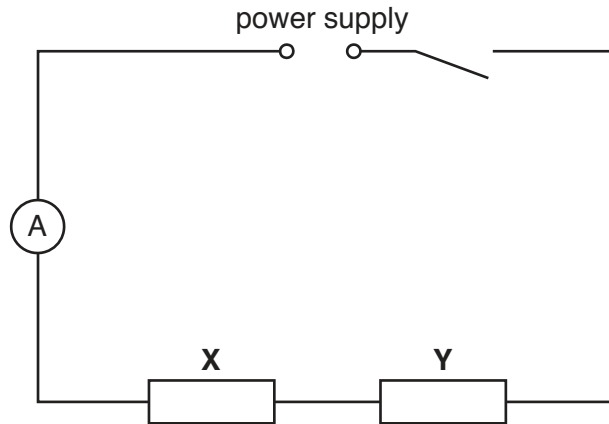
.....

[1]

[Total: 11]

- 2 In this experiment, you will investigate a circuit containing resistors. The circuit has been set up for you.

Carry out the following instructions, referring to Fig. 2.1.



**Fig. 2.1**

- (a) On Fig. 2.1, draw a voltmeter connected so that it measures the potential difference across resistor **X**. [1]
- (b) (i) Switch on. Record the value of the current  $I_S$  in the circuit.

$$I_S = \dots\dots\dots [1]$$

- (ii) • Use the voltmeter to measure and record the value of the potential difference  $V_X$  across resistor **X**.

$$V_X = \dots\dots\dots$$

Disconnect the voltmeter.

- Reconnect the voltmeter to measure and record the potential difference  $V_Y$  across resistor **Y**.

$$V_Y = \dots\dots\dots [1]$$

Disconnect the voltmeter.

- (iii) Reconnect the voltmeter to measure and record the potential difference  $V_S$  across the combination of both resistors.

$$V_S = \dots\dots\dots [1]$$

Switch off.

- (iv) A student suggests that  $V_S$  should be equal to  $(V_X + V_Y)$ .

State whether your readings support this suggestion. Justify your statement with reference to your results.

statement .....

justification .....

.....

.....

[2]

- (c) Calculate the resistance  $R_S$  of the combination of resistors, using your readings from (b)(i) and (b)(iii) and the equation

$$R_S = \frac{V_S}{I_S} .$$

$R_S = \dots\dots\dots$  [2]

(d) The circuit components are to be rearranged so that:

- resistors **X** and **Y** are in parallel
- the ammeter will measure the total current in the circuit
- the voltmeter will measure the potential difference across both resistors.

In the space below, draw a diagram of this circuit using standard electrical symbols.

[2]

(e) Set up the circuit as described in (d).

Switch on. Measure and record the total current  $I_P$  in the circuit and the potential difference  $V_P$  across the resistors.

$I_P = \dots\dots\dots$

$V_P = \dots\dots\dots$

[1]

Switch off.

[Total: 11]



3 In this experiment, you will determine the weight of a metre rule.

Carry out the following instructions, referring to Fig. 3.1.

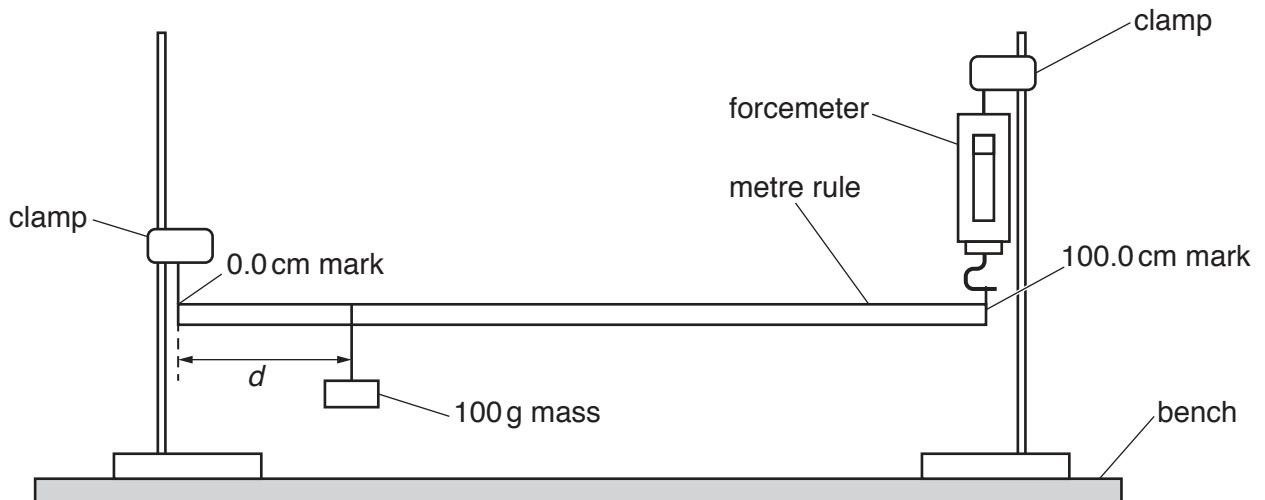


Fig. 3.1

- (a) (i)
- Move the 100g mass to a distance  $d = 10.0$  cm from the 0.0 cm end of the rule.
  - Adjust the height of the clamp holding the forcemeter so that the rule is horizontal.
  - Read, and record in Table 3.1, the forcemeter reading  $F$ .
  - Repeat this procedure for values of  $d = 30.0$  cm, 50.0 cm, 70.0 cm and 90.0 cm.

Table 3.1

$d/\text{cm}$	$F/\text{N}$
10.0	
30.0	
50.0	
70.0	
90.0	

[2]


- (ii) Explain how you made sure that the rule was horizontal before each reading. You may draw a diagram.

.....  
 .....  
 ..... [1]



- (b) Plot a graph of  $F/N$  ( $y$ -axis) against  $d/cm$  ( $x$ -axis).  
Start your axes from the origin  $(0,0)$ .

Draw a best-fit line.



[4]

- (c) (i) From your graph, determine  $F_0$ , the value of  $F$  when  $d = 0.0$  cm.

$F_0$  .....

- (ii) Calculate the weight  $W_R$  of the metre rule, using the equation  $W_R = 2 \times F_0$ .  
Give  $W_R$  to a suitable number of significant figures for this experiment.

$W_R =$  .....

[2]

(d) A student correctly plots your data points on another sheet of graph paper.

State and explain whether his best-fit line is likely to be the same as yours. Justify your answer with reference to the plots.

statement .....

explanation .....

.....

.....[1]

(e) Another student, carrying out the same experiment, is not sure if some of his values of  $F$  are correct.

Suggest **one** improvement to the procedure which would help him to obtain more reliable  $F$  values.

.....

.....

.....[1]

[Total: 11]

- 4 A student has a box of converging lenses, but does not know their focal lengths.

Plan an experiment that will enable her to determine an accurate value for the focal length  $f$  of one of the lenses, using the equation

$$f = \frac{uv}{(u + v)}$$

where  $u$  is the distance between an object and the lens and  $v$  is the distance between the lens and the focused image of the object.

The apparatus available includes:

- a lens holder
- a 12V lamp in a holder, with a power supply
- a card with a triangular hole covered with tracing paper.

Write a plan for the experiment.

You should:

- list any additional apparatus needed
- draw a diagram of how the apparatus would be arranged, clearly labelling  $u$  and  $v$
- write a method for carrying out the experiment including how  $f$  would be determined
- state the precautions which should be taken to obtain a clear, focused image
- state the precautions which should be taken to ensure that measurements are accurate once a focused image has been obtained.

You are **not** required to carry out the experiment.

.....

.....

.....

.....

